


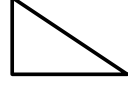
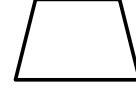
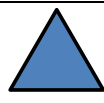





Name

Date



MENTAL MATHS QUIZ 2:4

1)	$16 - 4$	
2)	Half of 8	
3)	Which month comes after May? January March June October	
4)	Tick the object below which has the same shapes as this: <div style="display: flex; justify-content: space-around; align-items: center;">      </div> <div style="float: right; text-align: right;">  </div>	
5)	How much money? <div style="text-align: center;">  </div>	p
6)	How many sides does this shape have? <div style="text-align: center;">  </div>	
7)	Circle the 3rd number in the list below: <div style="text-align: center;">52 27 18 46 50 14 71</div>	
8)	Bob is 3 years older than Sam. If Sam is 11 years old, how old is Bob?	
9)	A pack of pencils has 4 pencils. I buy 3 packs. How many pencils? <div style="float: right;">  </div>	
10)	Write down the number one hundred and seventy-eight.	
11)	What is the next number: 2, 4, 6, 8, 10, ____	
12)	Today is Friday. What will the day be in 2 days' time? Saturday Monday Thursday Sunday	



Free Math Sheets, Math Games and Math Help

MATH-SALAMANDERS.COM