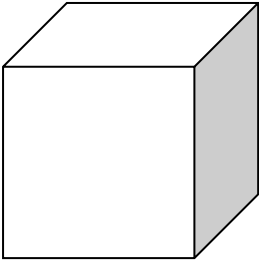


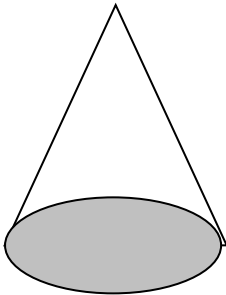
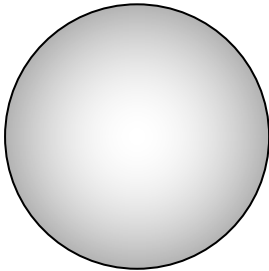


3D Shape Properties

Match the shapes to the correct descriptions.

	This 3D shape has no flat faces and no straight edges. It has just one curved face. It is a _____.
	This 3D shape has one curved face and one flat face. The flat face is a circle. It is a _____.
	This 3D shape has 6 flat square faces, 12 straight edges and 8 corners. It is a _____.
	This 3D shape has one curved face and 2 flat circular faces. It is a _____.
	This 3D shape has 6 flat faces; 2 are squares and 4 are rectangles. It has 12 straight edges and 8 corners. It is a _____.

Cube Cylinder Cuboid Cone Sphere