


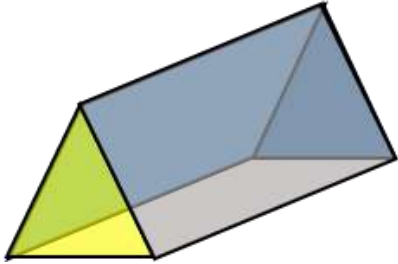
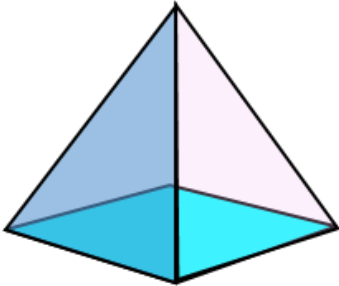
Name

Date



3D SHAPE PROPERTIES SHEET 2

For each shape, write down the number of faces, edges and vertices.

Shape	Properties
<p>Name of shape:</p> 	<p>Faces:</p> <p>Edges:</p> <p>Vertices:</p>
<p>Name of shape:</p> 	<p>Faces:</p> <p>Edges:</p> <p>Vertices:</p>
<p>Name of shape:</p> 	<p>Faces:</p> <p>Edges:</p> <p>Vertices:</p>



Free Math Sheets, Math Games and Math Help

MATH-SALAMANDERS.COM